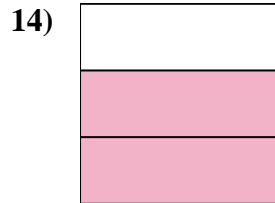
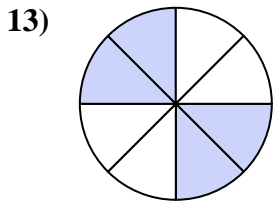
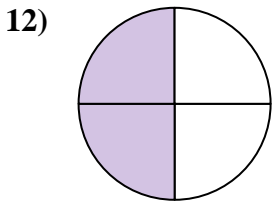
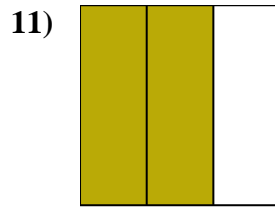
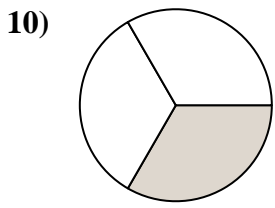
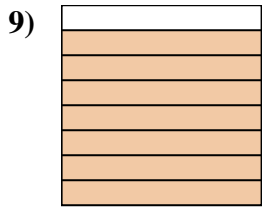
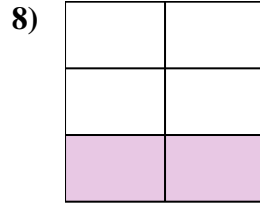
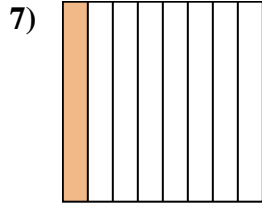
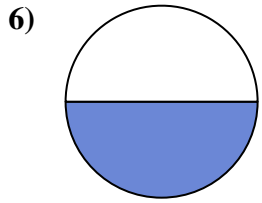
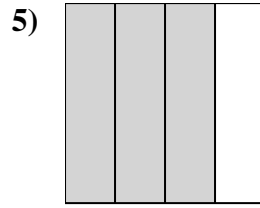
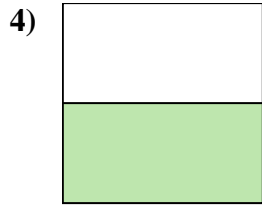
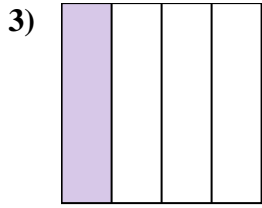
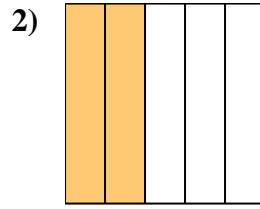
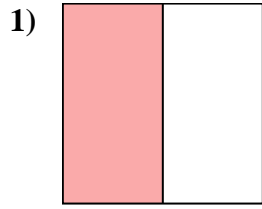
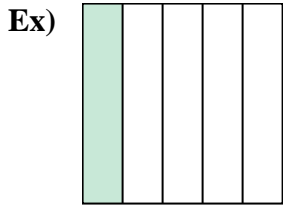




Write the shaded amount in word form.



**Answers**

Ex. one-fifth

1. \_\_\_\_\_

2. \_\_\_\_\_

3. \_\_\_\_\_

4. \_\_\_\_\_

5. \_\_\_\_\_

6. \_\_\_\_\_

7. \_\_\_\_\_

8. \_\_\_\_\_

9. \_\_\_\_\_

10. \_\_\_\_\_

11. \_\_\_\_\_

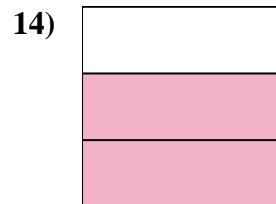
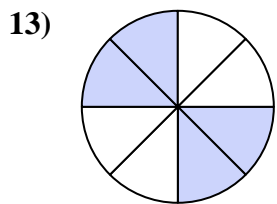
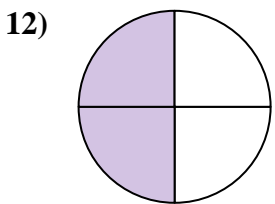
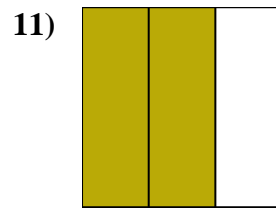
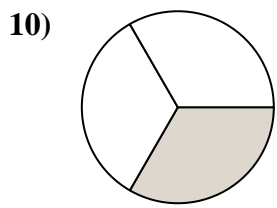
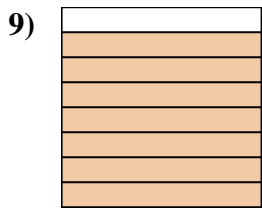
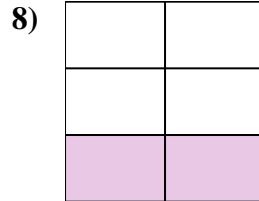
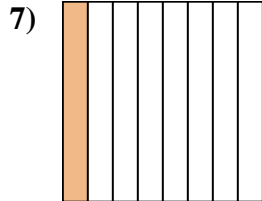
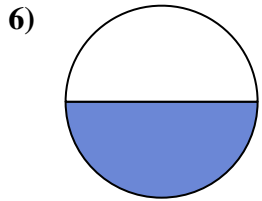
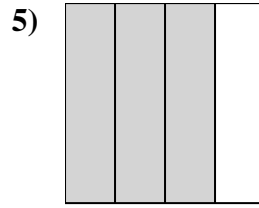
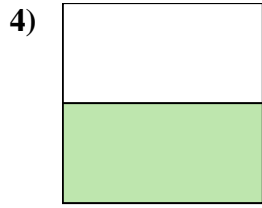
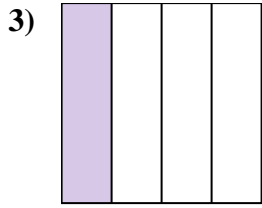
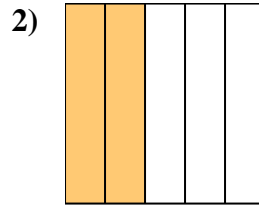
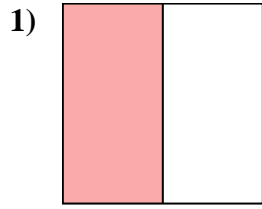
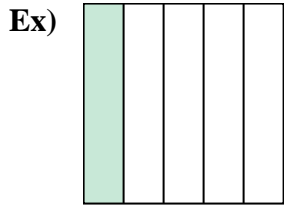
12. \_\_\_\_\_

13. \_\_\_\_\_

14. \_\_\_\_\_



Write the shaded amount in word form.



Answers

Ex. one-fifth

1. one-half

2. two-fifths

3. one-fourth

4. one-half

5. three-fourths

6. one-half

7. one-eighth

8. two-fifths

9. seven-eighths

10. one-third

11. two-thirds

12. two-fourths

13. four-eighths

14. two-thirds